



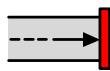

How much does this cost?



Use coins to help you to answer the questions



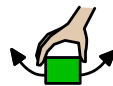
on the worksheet.




$$\frac{2}{5} + \frac{3}{5}$$



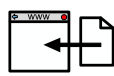
When you have finished the sums collect different



things and make a shop. Use coins to buy



things from your shop.



Take a photo and upload to evidence for learning.