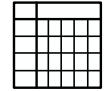
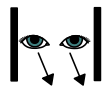
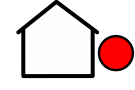

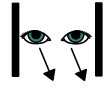


You are going to be a shape detectives.



Look at the 2D shapes in the table below.



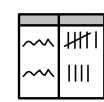
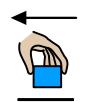
Look around your house and outdoors, how many shapes can



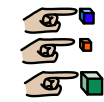
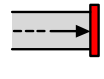

you find?



1



When you find one put a mark in the tally chart.



When you have finished count how many of each shape









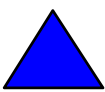



you have found.



Take a photo and put it on evidence for learning for me



to see.

 <p>Shape</p>	 <p>Mark when you see</p>  <p>the shape</p>	 <p>How many altogether?</p>
 <p>Square</p>		
 <p>Circle</p>		
 <p>Triangle</p>		
 <p>Hexagon</p>		
 <p>Rectangle</p>		
 <p>Semi circle</p>		