

Shape Detectives



You are going to be shape detectives and explore 3D shapes.

Your mission is to complete three shape tasks.

Task 1: Look around the house, in the garden or when you go for a walk and see how many 3D shapes you can find.

Use the tally chart to keep score and then add up the total number for each shape.

Which shape did you see the most?





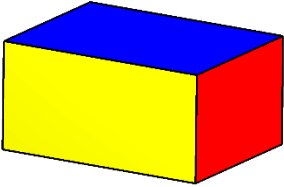
Task 2: Use pieces of paper or card and tape or glue and see how many 3D shapes you can make.


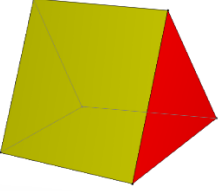
Take a photo of the shapes that you have made and upload them onto evidence for learning for me to see.

Task 3: Complete the shape properties worksheet.

Good Luck



Shape	Tally	Total amount
 Cylinder		
 Cube		
 Cone		
 Sphere		
 Cuboid		

 <p>Square based pyramid</p>		
 <p>Triangular prism</p>		

Self-Evaluation:

 <p>Easy</p>	 <p>Tricky</p>	 <p>Too hard</p>
---	---	---

Why did you think this?