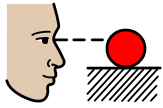


Maths - Time to be Kind 1



Look at

the

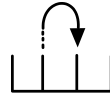


activities



on

the



next



page.


If



you can,



print




them



and



cut




them

out.




Can



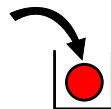
you




sort



them



into



'day'




and



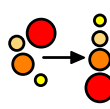
'night'?



Can



you



order



the



activities?



What



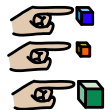
time



do you




do




each



activity?



Day




Night



sleep



eat



lunch




clean my teeth



eat



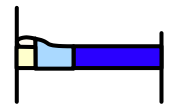
dinner



get dressed



get ready



for


bed



wake up




clean my teeth




play



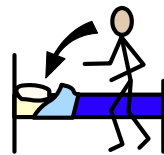
games




home



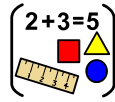
learning



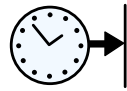
go to bed



watch TV



-




## Maths - Time to be Kind 2



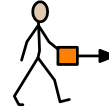
Use




a timer to measure



how long it



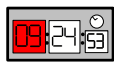
takes



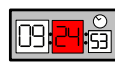
you



(in



hours,



minutes



or seconds)

to



do



the following



kind



activities:

### 1



1. Make your bed.

### 2



2.

Make

a



drink


for



someone



in



your



family.


### 3

# ?

3.

Do

the



washing up

or



load

the



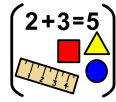
dishwasher.

### 4



4.

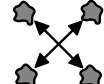
Tidy your room.







**Maths - Time to be kind 3**

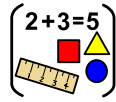


Complete this timetable to show what you did yesterday,

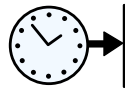


with times. Did you do anything kind to help your family?

 Time	   What I did



-



**Maths - Time to be Kind 4**

1. Noah's mum asked him to help cook the dinner. It took Noah 10 minutes to peel some potatoes. He finished peeling potatoes at 6 o'clock. What time did he start?
2. Kaitlyn went out for a walk today with her brother. They left the house at 3:30pm and got back home 45 minutes later. What time was it when they got back home?
3. George did a load of washing today. He put the clothes on a 40 degree quick wash, which takes 30 minutes. He pressed 'start' at 10.45 - what time did the washing machine stop?
4. Isaac emptied all the bins in his house into a big bin bag. It took him 15 minutes. He finished at 7.40pm - what time did he start emptying the bins?
5. Sam got out of bed, had a shower and got dressed in 19 minutes! He was ready at 8.30am - what time did he get up?
6. Ben's mum has asked for his help in the kitchen before dinner at 6 o'clock. Ben wants to finish watching a video on Youtube before he helps her. The video has 21 minutes left. The time is 5.46. Does Ben have time to help his mum AND watch the rest of the Youtube video?