

Can you choose the correct operation and solve these money problems?

Use a calculator to help you.



Remember to show your working in the box.

1. What is the total of £110.12, £3.43 and £11.07?

2. How much does one tub of ice cream cost, if 10 costs £3.90?

3. How much does one packet of sweets cost, if 10 costs £16.00?

4. Petrol costs 64p per litre. How much would it cost to fill a five litre can?

5. Tony saved 25p a day for 25 days. How much did he save?

6. Sarah was given £100 for her birthday.

She spent £32.99 on a camera, £13.49 on a DVD. How much money did she have left?




7. Ann has £16.00 and spends £2.00 on crayons. How much money does Ann have left?

8. Richard has £78.00 and Jessica has £3.45. How much more does Richard have than Jessica?

9. Christopher has £12.00. Books cost £4.00 each. How many books can Christopher buy?

10. One pencil costs 80p. How much do 24 pencils cost?

Self-evaluation:

		
Easy	Tricky	Too hard

I think this because,