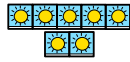




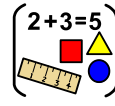
Friendship



week

-

-



Maths



Task

1

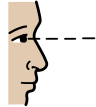
one

-

-



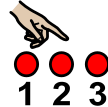
I



spy

+

and



count



Task

2

two

-

-



Share

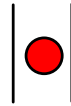
the



leaves

=

equally



between

the



animals.



Task

3

3

-

-



Have

a



go



at



solving


the



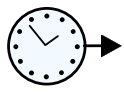
word



problems.



You



will



need

an




adult

to



help.



Don't




forget

to



share



your



learning



on




evidence

for



learning


so



we




can



see



how



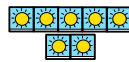
you



got on!

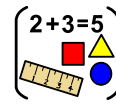


Friendship



week

-



Maths

People Who help Us I Spy and Count to 20 Checklist

Count the number of each type of People Who Help Us and write the numeral in the box.

doctors



lollipop people



dentists



vets



police officers



firefighters



teachers



lunchtime
supervisors



nurses



refuse collectors




I Spy and Count to 20





Sharing




Friends are good at sharing things. Have a go at



a




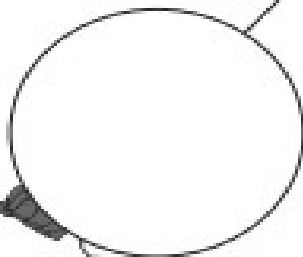

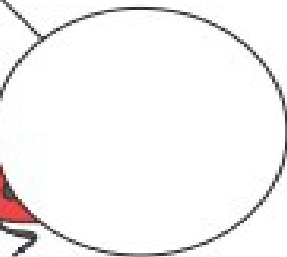
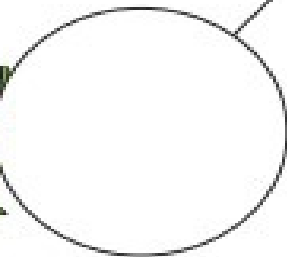
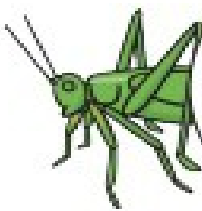


feeding the minibeasts, make sure they get the same

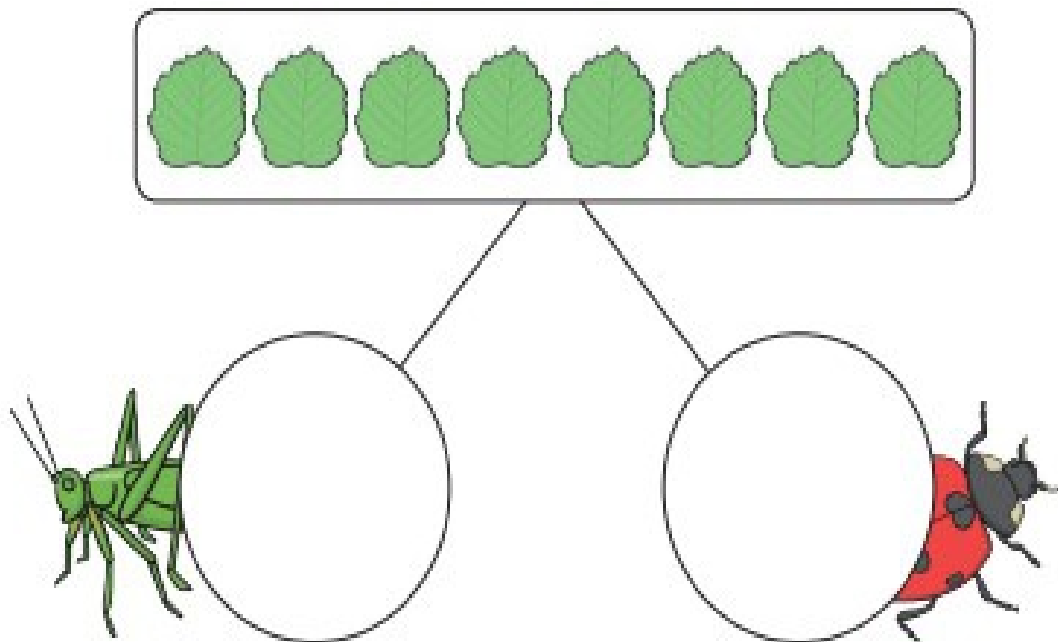
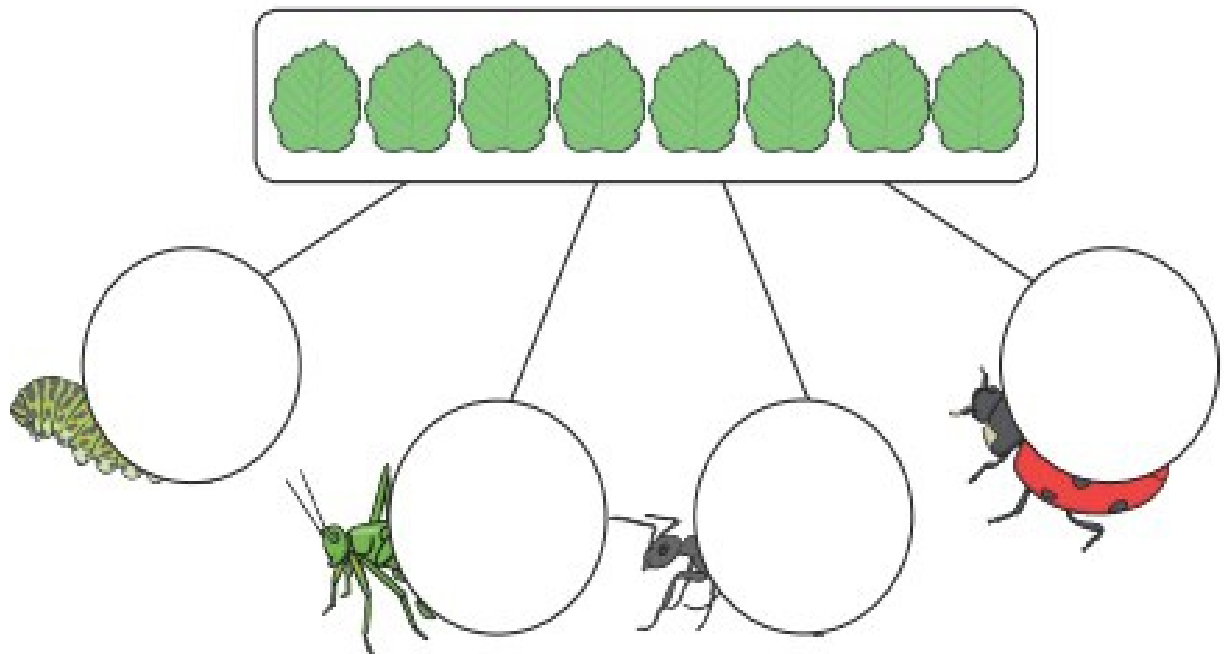
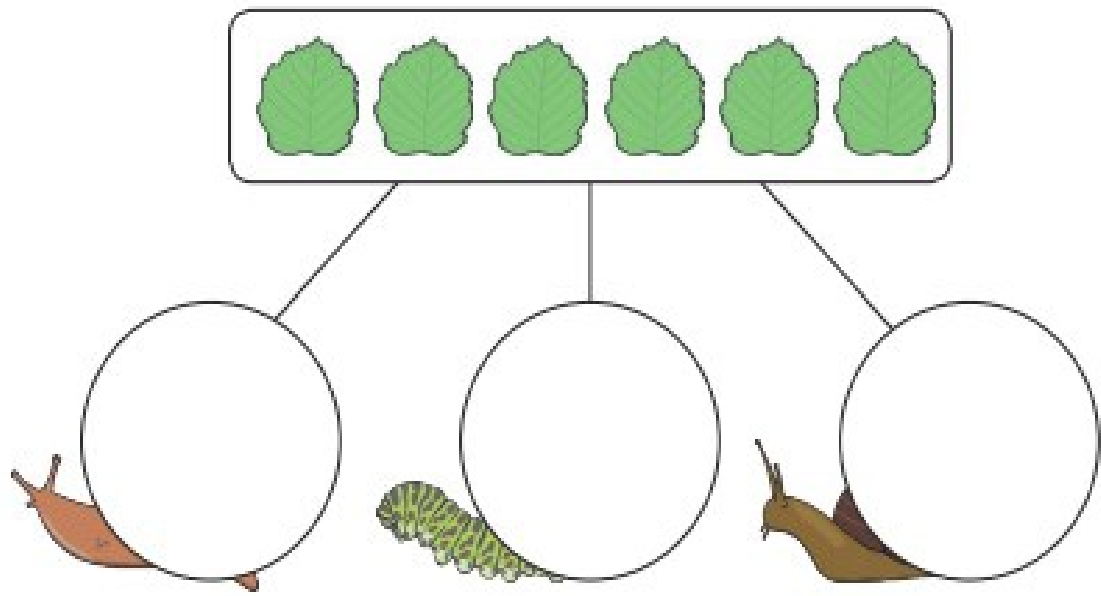


amount of food each. Write the number in each circle.




123







Sharing

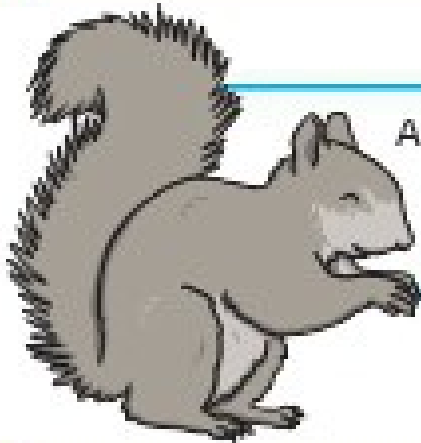



Word



Problems

Abed has 3 rabbits who love eating carrots. He has 6 carrots to share between them. How many carrots will each rabbit have? Draw 3 rabbits and share out the 6 carrots to check.



A squirrel collects 10 nuts to share between her 5 babies. How many nuts will each baby have? Draw the nuts to check.



Share out 15 biscuits between your favourite 5 toys. How many biscuits does each toy have? Is it fair?

If a packet has 20 sweets in and you share them equally between you and 3 friends, how many will you get each? Draw 20 sweets on a sheet of paper, equally sharing them into the 4 corners of the paper. Count how many are in each corner.



Cut up an apple into 8 slices. If you shared it equally between yourself and a friend, how many pieces would you have each?

Make a cake for some friends and share it out. If you cut it into 12 pieces and there are 4 people, how many slices could each person have?

