



10



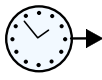
Using a 10 cube strip to measure.



© Naticulate



You



will



need

to



cut out

the

10



cube

strip to



do



these



tasks.



Use

the



table

and



symbols



to show



your

$$\begin{array}{r} 2 \\ +3 \\ \hline \rightarrow 5 \end{array}$$

answers.



1. Find

a



pen

or



pencil

and

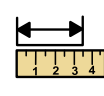


use



your

strip to



measure.

?



Is it longer or shorter than the strip?



2. Find

a



book.



Use



your

strip to measure.



?



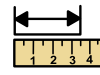
Is it longer



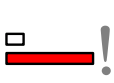
or shorter than the strip?



-



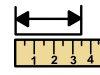

3. Find a fork - use your strip to measure. Is it



longer or shorter than the strip?



-



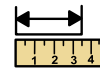

4. Find a mug - use your strip to measure. Is it



longer or shorter than the strip?



-



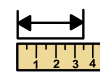

5. Find a shoe - use your strip to measure. Is it



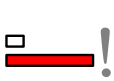
longer or shorter than the strip?



-



6. Find a teaspoon - use your strip to measure. Is it



longer or shorter than the strip?



-



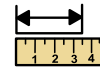

7. Find a box - use your strip to measure. Is it



longer or shorter than the strip?



-



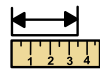
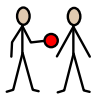
8. Find a bottle - use your strip to measure. Is it



longer or shorter than the strip?



-




9 Find a flower - use your strip to measure. Is it



longer or shorter than the strip?



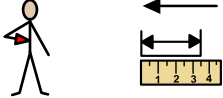












-



10 Find a leaf - use your strip to measure. Is it



longer or shorter than the strip?

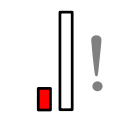

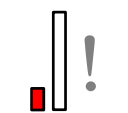
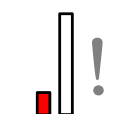
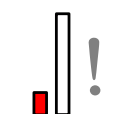
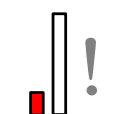
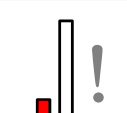
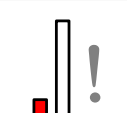
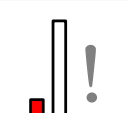
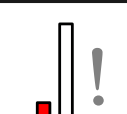










 <p>I measured</p>	 <p>it was longer shorter</p>	 <p>How many cubes?</p>
 <p>Pen or Pencil</p>		
 <p>Book</p>		
 <p>Fork</p>		
 <p>Mug</p>		
 <p>Shoe</p>		
 <p>Teaspoon</p>		
 <p>Box</p>		
 <p>Bottle</p>		
 <p>Flower</p>		
 <p>Leaf</p>		



© Naticulate



© Naticulate

 Shorter	 Shorter	 Shorter
 Shorter	 Shorter	 Shorter
 Shorter	 Shorter	 Shorter
 Shorter	 Longer	 Longer
 Longer	 Longer	 Longer
 Longer	 Longer	 Longer
 Longer	 Longer	<b>1</b>
<b>2</b>	<b>3</b>	<b>4</b>
<b>5</b>	<b>6</b>	<b>7</b>
<b>8</b>	<b>9</b>	<b>10</b>