

Time Problems:



Can you solve these problems?

1. How much times passes between 3.00 pm and 4.15pm?

2. How much time passes between 10.30pm and 12.45pm?

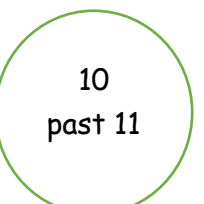
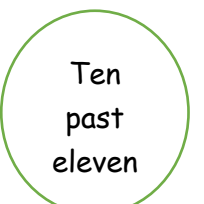
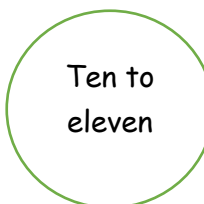
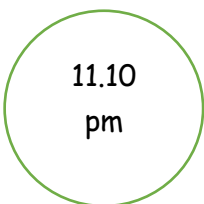
3. John sets off to walk to his friend's house at 3.20pm. It takes him 40 minutes to get there. What times does he arrive?

4. The dance lesson starts at 11.40am and lasts for 1 hour and 10 minutes. What time does it end?

5. The flight from London to Madrid lasts 2 hours and 20 minutes. The plane landed in Madrid at 1.40pm. What time did it take off from London?

6. A train arrives at the station at 11.10am. The journey took 50 minutes. What time did it leave the last station?

7. David meets his friend at the park at 10.20am. They spend 30 minutes in the playground and 20 minutes on the field playing football. Then they went home. Tick all the boxes that show the time they went home.



8. Jane works on her homework project for 1 hour and 10 minutes and stops at 2.40pm. What time did she start work? Tick all the boxes that show the time started work

1.30pm $\frac{1}{2}$ past 2 1.30 am Half past one 30 minutes past 1 3.40 pm

9. My sister and I went to the library at 10:35 am. We left at 11:30 am. How long did we stay?


10. Look at the table below that shows the start and end times of some TV shows.
 Task 1. Calculate how long each programme lasts, in minutes.
 Task 2. Order the programmes from the shortest to the longest in length.

| | Start | Finish | Length of programme |
|------------------|----------|---------|---------------------|
| Cartoon Capers | 12.10 pm | 1.00 pm | |
| Get that Dog | 1.00 pm | 2.10 pm | |
| Funny film clips | 2.20 pm | 2.50 pm | |

Shortest ←————→ Longest

| | | |
|--|--|--|
| | | |
|--|--|--|

Self-Evaluation

| | | |
|---|---|---|
|  |  |  |
| Easy | Tricky | Too hard |

Because,