


Maths

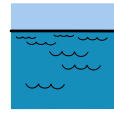
1 -

-

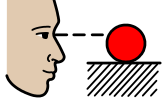


under

the



sea



Watch

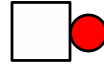
the

video




Capacity

1



by



Becky.



Then

find

a

container

to



practise



filling.

**1**



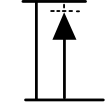
1.

Fill

the

container

to



nearly



empty.

**2**



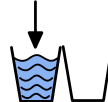
2.

Fill

the

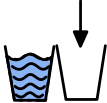
container

to



full.

**3**



3.

Empty

the

container



**4**



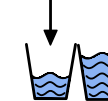
4.

Fill

the

container

to



half full.

**5**



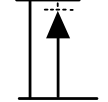
5.

Fill

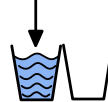
the

container

to



nearly



full.



Now



find

4


4




containers

of

different sizes.



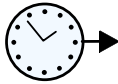
Which one



do you



think



will



hold

the



most?



Use

a



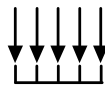
cup

to



fill



each one.



Record your results



below.

	
<p>1</p>	
<p>2</p>	
<p>3</p>	
<p>4</p>	