





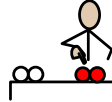

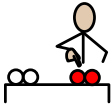




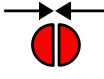


**+**   
 Adding Money

 You can  use  real  coins or  cut out  these to  complete

 these **123**  number sentences.

 Each  time  use  the coins  to make  up the  amounts

**+**  and then  add  the two amounts  together.



$5p + 6p =$

$11p + 5p =$

$14p + 10p =$

$15p + 2p =$

$25p + 10p$

$50p + 20p =$

$70p + 5p =$

$£1.00 + 25p =$

$£1.00 + £2.00 =$

$£1.20 + 50p =$

$£2.00 + £1.50 =$

$£2.00 + 75p =$