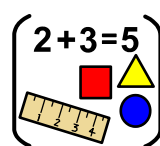




2019



Christmas 2019 Maths Challenge



Who



gets

the



most



Christmas cards



in


your



house?

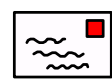
1

1. Make a tally chart, showing everyone in your house.

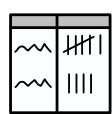


2

2. Read who the Christmas cards are addressed to and



record them on the tally chart.



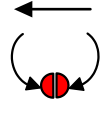
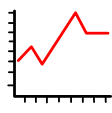
3

3. Make a graph to show your findings.



4 ?

4. What type of graph have you made?



4

4. Who got the most?

